


# Year 1 Maths Activity Mat: Autumn 1

1

## Section 1

How many strawberries are here?



## Section 2

Write the number that is one more.

4 →  6 →  10 →

## Section 3

Write the numbers in the box.

three  nine  one

## Section 4


7-1=

5-1=

2-1=

## Section 5

Write a number statement for the picture.

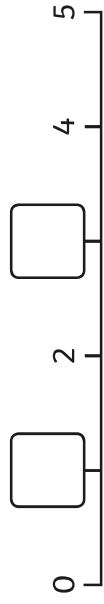


+

=

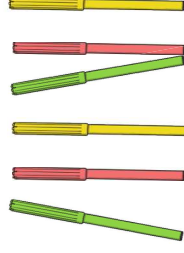
## Section 6

Put the missing numbers on the number line.



## Section 7

Tessa has 6 pens. She loses 1 pen.  
How many pens does she have left?



## Section 8

What's next? Write 3 more numbers in this sequence.

