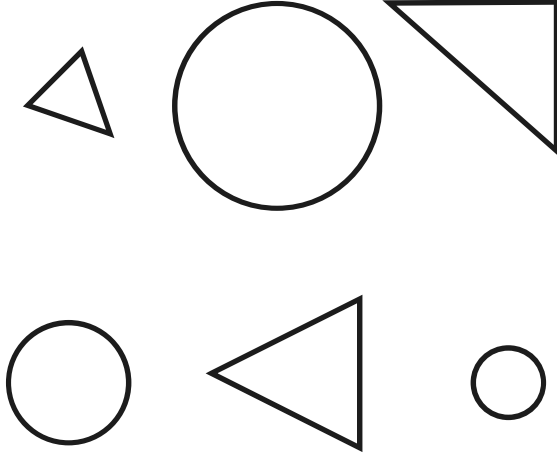


# Year 1 Maths Activity Mat: Autumn 1

3

## Section 1

Colour in the circles.



## Section 3

Match each number statement to the correct answer.

$3 + 1$

5

$5 - 0$

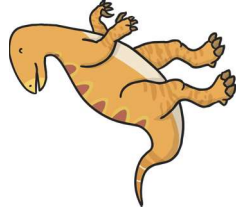
4

$4 + 2$

6

## Section 6

Use a ruler to measure how tall the dinosaur is.



The dinosaur is \_\_\_ cm tall.

## Section 4

Tim has 4 football cards. He loses 1. How many does he have left?



## Section 7

Write an addition statement for the picture.



+

=

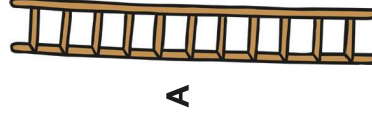
## Section 2

1	2	3	4	5
---	---	---	---	---

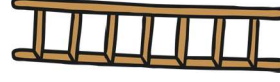
$3 - 1 =$

## Section 5

Circle the tallest ladder.



A



B

## Section 8

Fill in the missing numbers.

