

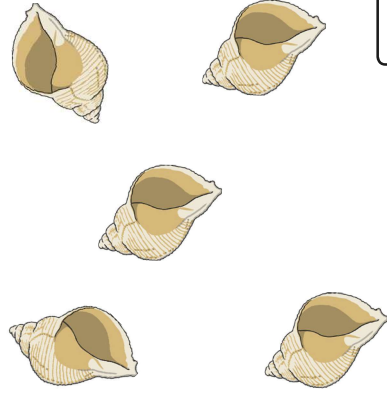
Year 1 Maths Activity Mat: Autumn 1

5

Section 1

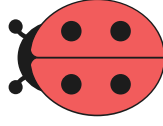
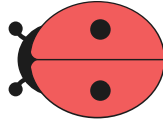
Take 2 away.

How many are left?

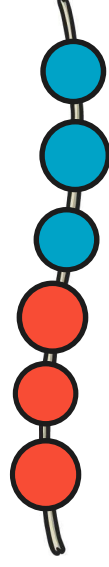


Section 3

Tick the ladybird with the most spots.



Section 4



+

=

Section 7

How much money is here?

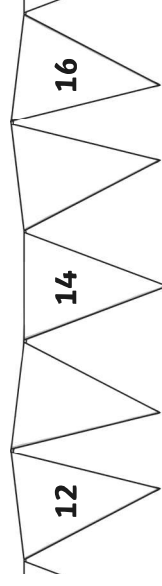


Section 2

Use a ruler to draw a square.


Section 5

Write the 2 missing numbers on the flags.



Section 6

Draw the correct number of chocolate chips on the biscuit.



6

Section 8

Kashim had:

1 dog

1 cat

2 fish

How many pets did he have?