

Counting Backwards

4. True or false? Each number track is missing the number 6.

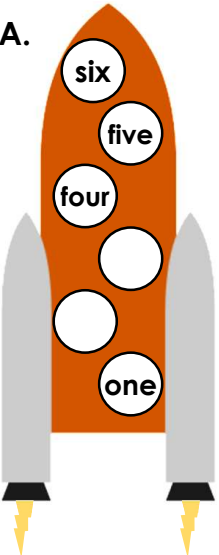
9	8	7	6		4	3
						
	five	four	three	two	one	zero



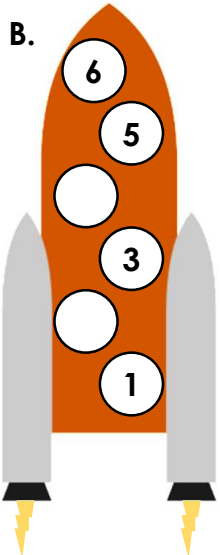
VF
HW/Ext

5. Count backwards to help the rockets blast off.

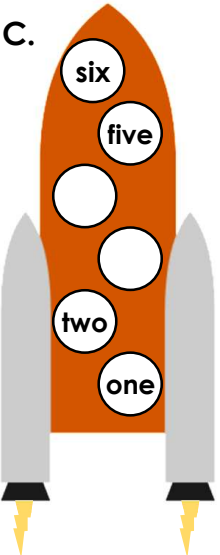
A.



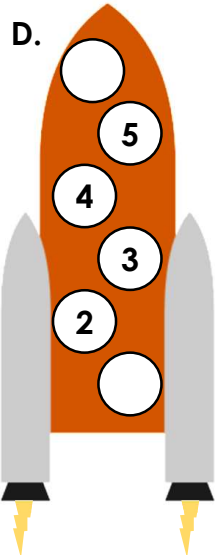
B.



C.



D.





VF
HW/Ext

6. June and Dan are counting backwards from 10.



June

The next number is 9.

The next number is eight.



Dan

Who is correct? Explain how you know.



RPS
HW/Ext