


## Counting Objects


4a. Sid has 7 pieces of fruit. How many bananas does Sid have?



PS


## Counting Objects

4b. Timmy has 10 pieces of fruit. How many blueberries does Timmy have?




PS

5a. How many balls are in the circle?



PS

5b. How many balls are in the circle?



PS

6a. Sally is counting fish.




There are 5 fish.  
4 are spotty and 1 is  
stripy.

Is she correct? Explain your answer.



R

6b. Phil is counting fish.



There are 7 fish.  
5 are stripy and 2 are  
spotty.

Is he correct? Explain your answer.



R